



# Uhrzeiten bestimmen

Name: \_\_\_\_\_




\_\_\_\_\_ Uhr

\_\_\_\_\_ Uhr




\_\_\_\_\_ Uhr

\_\_\_\_\_ Uhr




\_\_\_\_\_ Uhr

\_\_\_\_\_ Uhr




\_\_\_\_\_ Uhr

\_\_\_\_\_ Uhr




\_\_\_\_\_ Uhr

\_\_\_\_\_ Uhr




\_\_\_\_\_ Uhr

\_\_\_\_\_ Uhr




\_\_\_\_\_ Uhr

\_\_\_\_\_ Uhr




\_\_\_\_\_ Uhr

\_\_\_\_\_ Uhr



\_\_\_\_\_ Uhr

\_\_\_\_\_ Uhr




\_\_\_\_\_ Uhr

\_\_\_\_\_ Uhr




\_\_\_\_\_ Uhr

\_\_\_\_\_ Uhr





\_\_\_\_\_ Uhr


\_\_\_\_\_ Uhr




\_\_\_\_\_ Uhr




\_\_\_\_\_ Uhr




\_\_\_\_\_ Uhr




\_\_\_\_\_ Uhr





\_\_\_\_\_ Uhr




\_\_\_\_\_ Uhr



\_\_\_\_\_ Uhr

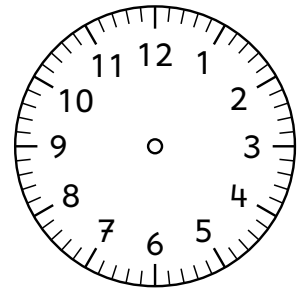


\_\_\_\_\_ Uhr




\_\_\_\_\_ Uhr

1 h 10 min




\_\_\_\_\_ Uhr




\_\_\_\_\_ Uhr

2h 15 min




\_\_\_\_\_ Uhr




\_\_\_\_\_ Uhr

3 h 20 min




\_\_\_\_\_ Uhr




\_\_\_\_\_ Uhr

45 min




\_\_\_\_\_ Uhr



\_\_\_\_\_ Uhr

1h 12 min



\_\_\_\_\_ Uhr